



**ENGLISH ENRICHMENT SHEET**

Name \_\_\_\_\_ Date \_\_\_\_\_



Hi Kids ! help me to learn and complete this sheet.

**Q.1 Unseen passage - 1**

Diwali is the festival of lights. It is an important festival of the Hindus. People wear new clothes. Children go to shop with their parents. They buy toys and crackers. People light lamps and candles in the evening. They worship Lakshmi, the goddess of wealth. People decorate their houses with Rangoli. Children love to play crackers.

**I. Choose the correct option.**

- |                              |                          |                                   |
|------------------------------|--------------------------|-----------------------------------|
| 1. Diwali is the festival of | 2. People light lamps in | 3. It is an important festival of |
| a. colour                    | a. the morning           | a. the Hindus                     |
| b. light                     | b. the evening.          | b. the Muslims                    |

**II. Fill in the blanks with suitable words from the passage.**

- Children go to shop with their \_\_\_\_\_.
- People worship \_\_\_\_\_, the goddess of \_\_\_\_\_.
- People decorate their houses with \_\_\_\_\_.

**III. Make sentences:**

- festival \_\_\_\_\_
- decorate \_\_\_\_\_

**Baby Chickens**

A mother chicken sat on her nest. She was a big chicken with yellow feathers. She was sitting on some eggs. One day the eggs cracked open. Then some little chicks popped out of the eggs. Now the chickens had six chicks.

1. Where did the mother chicken sit?

\_\_\_\_\_

2. What colour were her feathers?

\_\_\_\_\_

3. What was the mother chicken sitting on?

\_\_\_\_\_

4. What happened to the eggs one day?

\_\_\_\_\_

5. What came out of the eggs?

\_\_\_\_\_

6. How many chicks were there?

---

The New Bicycle

Rihaan has a new bicycle. It is bright pink and shiny. It was a gift from his uncle.

He hid it behind a bush to surprise him. When Rihaan looked behind the bush and saw the bicycle, She jumped for jump. It was just what she wanted. He gave her uncle a big hug.

He loves his new bicycle and he loves her uncle.

1. What colour is the bicycle?

---

2. Who gave it to Rihaan?

---

3. Where was it hidden?

---

4. What did Rihaan do when he saw the bicycle?

---

Read the story. Put a  mark in the correct sentence and an  mark in the incorrect sentence.

I see butterflies at the park.  
They are blue.  
I am going to catch them.  
Can you see the butterflies?



I see butterflies at the park.

I see dragonflies at the park.

They are blue.

They are red.

I am going to catch them.

Can you see the butterflies?

Can you see the dragonflies?

Teacher's sign: \_\_\_\_\_



**ENGLISH ENRICHMENT SHEET**


Name \_\_\_\_\_ Date \_\_\_\_\_



Hi Kids ! help me to learn and complete this sheet.

**am is are**  
These are also verbs. They are called **be** verbs.  
You use **am** with **I**.  
**I am**  
You use **is** with **he, she** and **it**.  
**He is She is It is**  
You use **are** with **you, we** and **they**.  
**You are We are They are**

You **is** my friend. **Right**  **Wrong**



**(B) Use am, is or are to complete each sentence.**

- I \_\_\_\_\_ reading a book.  
They \_\_\_\_\_ my father and mother.  
He \_\_\_\_\_ good at maths.  
You \_\_\_\_\_ my best friend.  
We \_\_\_\_\_ in the same class.  
She \_\_\_\_\_ a beautiful girl.  
It \_\_\_\_\_ my English book.

**(C) Tick (✓) the correct statements.**

- A cow is a plant.  
Elephants are big animals.  
Mountains are small.  
A house is a place to live in.  
Usha and Tara are the names of girls.  
You and I are people.

<input type="checkbox"/>
<input type="checkbox"/>
<input type="checkbox"/>
<input type="checkbox"/>
<input type="checkbox"/>
<input type="checkbox"/>

**Q.1 Tick (✓) the correct words in the brackets.**

- The man (am, is, are) wearing a cap.
- Birds (am, is, are) sitting on treetops.
- We (am, is, are) learning grammar.
- People (am, is, are) walking in the streets.
- A kite (am, is, are) flying high up in the sky.



**Q.2** Fill in the blanks with the present continuous form of the verbs given in the brackets. Do not forget to use **am, is or are**.


1. Meena and Rita \_\_\_\_\_ to school. (go)
2. My friends \_\_\_\_\_ me. (call)
3. It \_\_\_\_\_ outside. (rain)
4. I \_\_\_\_\_ chocolate. (eat)
5. The children \_\_\_\_\_ noise. (make)
6. Ouch, you \_\_\_\_\_ on my toe! (step)
7. Look! They \_\_\_\_\_ this way. (come)
8. The farmer \_\_\_\_\_ in the field. (work)
9. My little brother \_\_\_\_\_. (cry)
10. The teacher \_\_\_\_\_ (stand) and the students \_\_\_\_\_ (sit).



**am, is and are**

) **Fill in the blanks with am, is or are.**

1. We \_\_\_\_\_ watching television.
2. Rohit \_\_\_\_\_ a strong boy.
3. It \_\_\_\_\_ eight o'clock now.
4. She \_\_\_\_\_ a taxi driver.
5. Cats and dogs \_\_\_\_\_ pet animals.
6. You \_\_\_\_\_ late again.
7. My brother \_\_\_\_\_ a waiter.
8. We \_\_\_\_\_ good children.
9. My brother and I \_\_\_\_\_ in the same class.
10. Tom and Jerry \_\_\_\_\_ cartoon characters.
11. They \_\_\_\_\_ my parents.
12. He \_\_\_\_\_ our good neighbour.



Teacher's sign: \_\_\_\_\_



MATHEMATICS ENRICHMENT SHEET

Name: \_\_\_\_\_

Date: \_\_\_\_\_



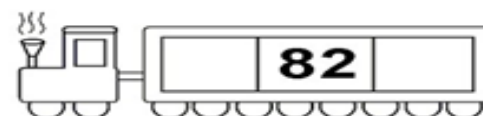
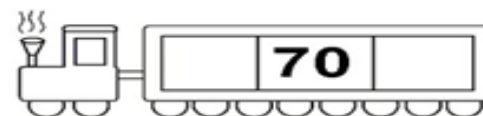
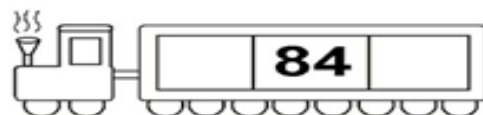
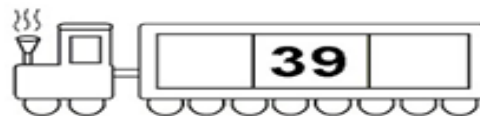
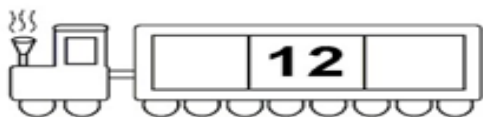
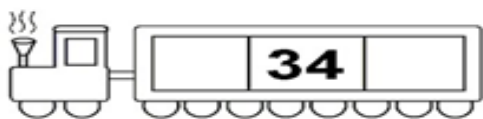
Hi! I'm Creepy the Caterpillar. Help me solve these questions.

Q1. Look at each group of snowballs. Write them in order from least (small) to greatest or greatest to least.

Q2. Fill in the blanks.

1. I am the number that comes after 56. I am.....
2. I am the number that comes before 72. I am.....
3. I am the number that comes between 74 and 76. I am.....
4. We are three friends. We come before 68 and after 64. We are....., ..... and .....
5. We are the numbers who come between 92 and 95. We are ....., ....., and .....
6. What number is 10 less than 96?.....
7. What number is 10 more than 52?.....

**Q3. Write the number that comes before and after.**



**Q4. Tick the correct answer.**

a) 10 less than 4 tens is:

- i) less than 3 tens      ii) same as 3 tens      iii) greater than 3 tens

b) What comes just before 100?

- i) 99 ones      ii) 9 tens 9 ones      iii) both i and ii

**Q5. In a test of 100 marks, four students get the following marks.**

Sujatha : 77	Salim : 82	Harish : 58	Harinder : 91
--------------	------------	-------------	---------------

i) Who got the highest marks?.....

ii) Arrange the names of children in ascending order to their marks.

**Q6.** Nisha had 8 packets of biscuits with 10 biscuits in each packet. She also has 4 more biscuits. How many biscuits does she have now?.....

(Hint: How many tens? How many ones)

**Q7. Arrange these in increasing order of their number in your body.**

Fingers, ears, nose, teeth, hair \_\_\_\_\_

**Q8. Fill in the blanks with greater than and less than.**

a) 62 is .....56      b) 85 is .....87

c) 78 is .....58      d) 64 is .....93

**Q9. Complete the following.**

1. Write the two numbers lying between 68 and 72?.....

2. How many numbers lie in between 32 and 40?

a) 7

b) 9

c) 8

3. Ronak has 97 shells. How many more shells does he need to make the count 100?

a) 4

b) 3

c) 5

**Q10. Cross out the numbers which are not in order.**

a) 24	31	37	29	46
b) 87	84	76	65	69
c) 45	48	39	28	24

**Q11. Look at the jumbled words. Get the correct number and write the corresponding (same) numbers.**

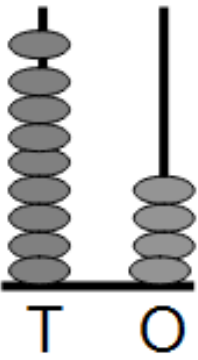
a) IXSTY-IEGTH = .....

b) YFORT- EVSEN = .....

c) NEYINT- NEO = .....

d) YHRITT- WOT = .....

**Q12. Write the number shown on the abacus in all ways.**

	Standard form =
	Words form =
	Expanded form =
	Tens and ones = .....tens.....ones

**Q13. Complete the following.**

Example:

One more than	The number after	Plus 1
84 is <u>85</u>	84 is <u>85</u>	84 + 1 is <u>85</u>
65 is .....	65 is .....	65 + 1 is .....
81 is .....	81 is .....	81 + 1 is .....
59 is .....	59 is .....	59 + 1 is .....
70 is .....	70 is .....	70 + 1 is .....
98 is .....	98 is .....	98 + 1 is .....
42 is .....	42 is .....	42 + 1 is .....
29 is .....	29 is .....	29 + 1 is .....

One less than	The number before	Minus 1
72 is <span style="border: 1px solid black; border-radius: 50%; padding: 2px 5px;">71</span>	72 is <span style="border: 1px solid black; border-radius: 50%; padding: 2px 5px;">71</span>	72 - 1 is <span style="border: 1px solid black; border-radius: 50%; padding: 2px 5px;">71</span>
46 is .....	46 is .....	46 - 1 is .....
98 is .....	98 is .....	98 - 1 is .....
80 is .....	80 is .....	80 - 1 is .....
77 is .....	77 is .....	77 - 1 is .....
35 is .....	35 is .....	35 - 1 is .....
50 is .....	50 is .....	50 - 1 is .....
64 is .....	64 is .....	64 - 1 is .....

**Q14. Tick the correct answer.**

a) The number is more than 80 and less than 90.

i) 92

ii) 78

iii) 84

iv) 67

b) The same number as  $70 + 8$ .

i) 67

ii) 70

iii) 57

iv) 78

**Q15. Circle the number name that is the same as seven tens.**

i) seventy

ii) sixty

iii) seventeen

**Q16. Circle the number name that is the same as 2 tens and nine ones.**

i) ninety two

ii) nineteen

iii) twenty nine

**Q17. Think and answer the following question.**

What number am I?

My tens place has the same number as the number of arms an octopus has.



My ones place has the same number as the number of leg an ant has.



Answer:.....

Teacher's sign: