



ENGLISH ENRICHMENT SHEET

Name _____ Date _____



Hi Kids ! help me to learn and complete this sheet.

Q1. Read the following sentences. Pick out the nouns and the pronouns used in place of those nouns. Write them in the table that follows.

- a. This is Barat. He is my classmate.
- b. Where is Shaheen? Mother is calling her.
- c. This is my puppy. It is very naughty.
- d. Mona, how are you?
- e. Mrs and Mr Ganguli are the new neighbours. They are from Kolkata.

Sentences	Noun	Pronouns

Q2. Fill in the blanks with the correct personal pronouns in place of nouns given in brackets.

- a. _____ is dreaming. (Raghav)
- b. _____ are on the wall. (lizards)
- c. _____ is black. (the blackboard)
- d. The rabbit pushed _____ into the well. (the lion)
- e. _____ are watching television. (my mother and I)
- f. _____ are playing in the garden. (children)
- g. _____ is swimming in the pool. (the duck)
- h. Don't disturb _____. (Angela)
- i. Let _____ come in. (Noorie and Nazma)

Q3. Replace the pronoun by possessive pronouns.

- a. Don't take this ball. This ball is (Sonu) _____.
- b. This car is (my parents and I) _____.
- c. Is not this ring beautiful? This ring is (Monalika) _____.
- d. This house is (Aditya and Meena) _____.

Q4. Read the following sentences. Pick out the subject and object, and write in the correct columns.

- a. The boy hurt himself by the knife.
- b. The snake coiled itself in the basket.
- c. I enjoyed myself.

Sentence	Subject	Object

Q5. Fill in the blanks with the reflexive pronouns.

- a. The lion trapped _____ foolishly.
- b. They cursed _____
- c. Mohan, promise _____ not to misbehave.
- d. I am a doctor. I have fever. I will treat _____.

Q.6 Underline the interrogative pronouns and circle the interrogative adjective.

- a. What is your dream?
- b. Who is your favourite cricketer?
- c. Whom did you give notes?
- d. Whose daughter is this girl?
- e. Which story is it?
- f. Which is the story you are reading?

Q7. Frame questions for the following answers using interrogative pronouns.

- a. This is my pen. (What)

- a. The teacher punished Neeraj for his misbehaviour. (Whom)

- a. Mine is the project declared the best. (Whose)

Q8. Fill in the blanks with correct pronoun.

1. The red bag on the table is Annie's. _____ was given to _____ by her aunt.
2. Arjun, Junaid and Sabrina went to the circus last week _____ enjoyed _____ thoroughly.
3. Jasmine did not ask for help and fixed the radio _____.
4. Where is the new book _____ Susan gave me last week?
5. _____ the lights in the classroom must be switched off before _____ leaves.
6. Athena called the Sharma residence last night but _____ answered the phone.
7. It was Maya's birthday last week. Mary gifted _____ a beautiful pen.
8. Prateek said _____ will meet us there.
9. Arijit and Auritro gifted me a card they had made _____.
10. Varun exchanged slippers with Tina but his slippers were bigger than _____.



TAPOVAN INTERNATIONAL SCHOOL, MAHESANA
STD -4
MATHEMATICS ENRICHMENT SHEET

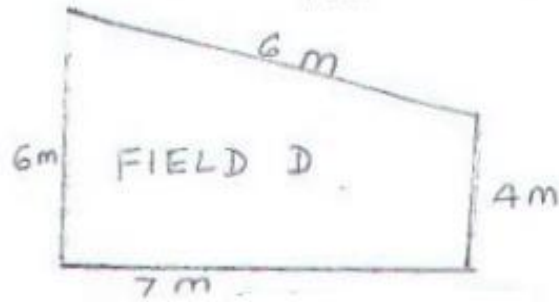
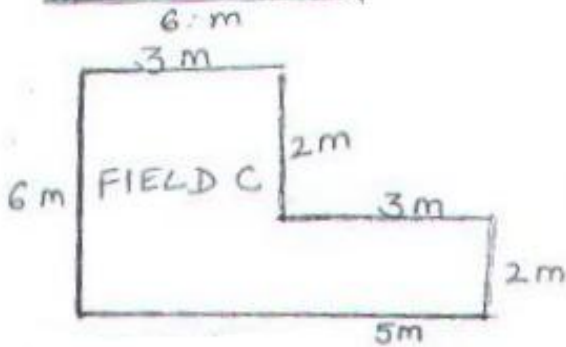
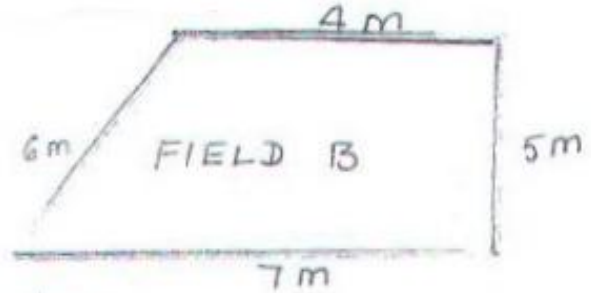



Hi! I'm **Creepy** the Caterpillar. Help me solve these questions.

Name: _____

Date: _____

Q1. Which of the following fields has the largest perimeter (longest boundary)?



Perimeter of field A	Perimeter of field B
Perimeter of field C	Perimeter of field D

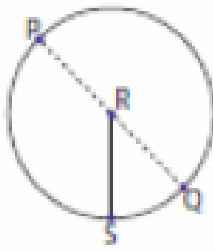
Field _____ has the largest perimeter.

Q2. Find the perimeter of the square whose side is:

a) 6 cm	b) 14 m
---------	---------

Q3. Identify the parts of each circle.

1)

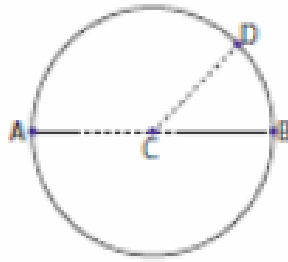


Circle = _____

Radius = _____

Diameter = _____

2)

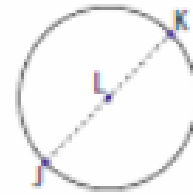


Circle = _____

Radius = _____

Diameter = _____

3)

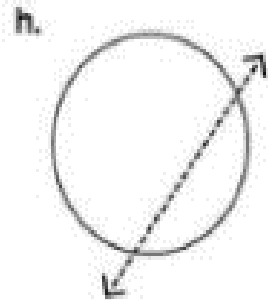
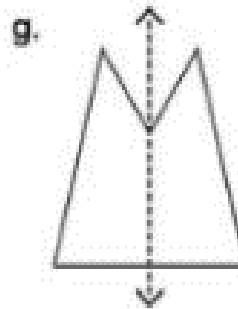
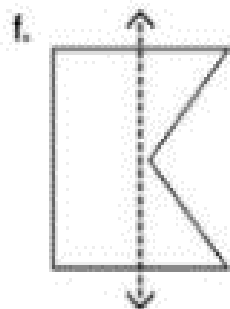
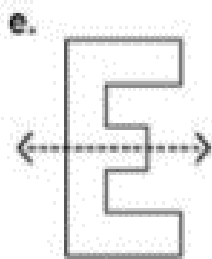
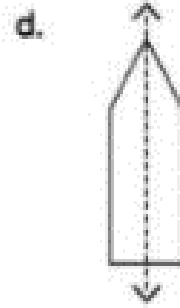
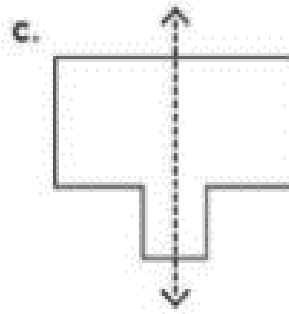
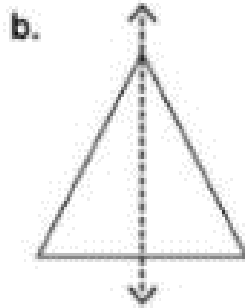
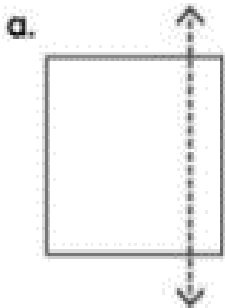


Circle = _____

Radius = _____

Diameter = _____

Q4. Tell whether the dotted line on each shape is a line of symmetry. Write 'yes' or 'no'.



Teacher's sign: